

# **PM SHRI KV RRC FATEHGARH**

**AUTUMN BREAK HOMEWORK FOR EVS**

**CLASS 3**

## **1. MAP WORK: (Paste these two maps in your EVs notebook)**

- a) Fill and learn the Indian political map with states, capitals and union territories.**
- b) Fill and learn the map with Indian national parks and bird sanctuaries.**

## **2) ACTIVITY WORK:**

- a) Pick up a little soil from your surroundings and write about its colour, texture, smell and type in your EVS notebook.**
- b) Fill the table of birds with their sounds given on page no- 69 and do this work in your EVs notebook also.**

## **3) BOOK WORK:**

- a) Complete the table given on page no-70. Do this work in your EVS notebook as well.**
- b) Write two paragraphs, one on your favourite animal and another on your favourite bird.**

AUTUMN BREAK HOMEWORK FOR MATHS

CLASS 3

**Learning Skills (Critical Thinking)**

**1** Fill in the missing numbers.

(a)  $6 \times 6 = \square$  (b)  $0 \div 4 = \square$   
 (c)  $50 \div \square = 50$  (d)  $\square \div 4 = 8$   
 (e)  $63 \div 7 = \square$  (f)  $18 \div 1 = \square$   
 (g)  $12 \div \square = 1$  (h)  $\square \div 56 = 1$   
 (i)  $70 \div \square = 10$  (j)  $\square \div 9 = 0$   
 (k)  $8 \times 7 = \square$  (l)  $35 \div \square = 7$   
 (m)  $23 \times \square = 23$  (n)  $\square \times 32 = 0$

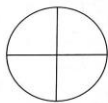
**2** Put the correct sign (+ or  $\times$ ) in each of the following.

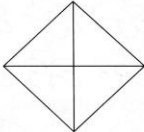
(a)  $8 \square 6 = 48$  (b)  $6 \square 4 = 10$   
 (c)  $4 \square 9 = 36$  (d)  $5 \square 8 = 40$   
 (e)  $9 \square 5 = 14$  (f)  $7 \square 7 = 49$

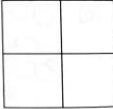
**2** Fill in the blanks using half or double.


(a) 3 candies are \_\_\_\_\_ of 6 candies.  
 6 candies are \_\_\_\_\_ of 3 candies.  
 (b) 5 balls are \_\_\_\_\_ of 10 balls.  
 10 balls are \_\_\_\_\_ of 5 balls.  
 (c) 16 chocolates are \_\_\_\_\_ of 8 chocolates.  
 8 chocolates are \_\_\_\_\_ of 16 chocolates.  
 (d) 14 pencils are \_\_\_\_\_ of 7 pencils.  
 7 pencils are \_\_\_\_\_ of 14 pencils.

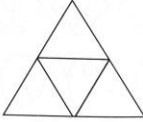
**3** Colour the shapes below to show the fractions as instructed.

 1 quarter

 2 quarters

 3 quarters

 2 quarters

 3 quarters

# Division Squares

Each row and column is a division problem. Complete the math and write the answers in the empty spaces.

Ex.

12	÷	4	=	3
6	÷	2	=	3
2	÷	2	=	1

8				2
		1		
4				

24	3	
6		2
	1	

	2	
4		2
4		4

32		8
	2	8

	6	3
9		3

28		4
	7	2

	9	4
12		
	3	

30	5	
	5	
2		

Copyright © 2010-2013 Education.com

Created by Education.com

				2	x	13	=					6		
				x				x				x		
6	x		=	18				3	x		=			
	9			=				=				=		
	=							78				54		
	81													
2									11	x		=	11	
x										x				
5										6				
=									=					
	x		=	30					4	x		=	24	
				x										
					x	7	=	21				=		
								3						
10	x		=	90				x				x		
x									12	x	4	=		8
10														
=									3					
									x					
	x	4	=						11	x		=	121	



**Autumn Break Holiday homework (2024-25)**

**Class 3**

**Subject:- English**

Q1 ) Read any story book you have and write a review of it on A4 size paper.

Q2) Make some toys for jadui pitara. (Working Toys)

Q3) Tell the story of Manish Saves the Ant given on page no. 60 in English book.

Q4) write down a paragraph on

1) My favorite Place

Q5) Write a few lines about the picture given on page no. 64 in English book.

पीएम श्री केंद्रीय विद्यालय आर.आर.सी. फतेहगढ़

शरदकालीन अवकाश गृहकार्य

कक्षा - 3

सत्र : २०२४ - २०२५.

विषय - हिंदी

1. पाँच पृष्ठ सुलेख लिखे ।
2. परियोजना कार्य – कुछ इस प्रकार क्रिया की परिभाषा उदाहरण सहित चित्र बनाकर लिखे।



3. निम्नलिखित शब्दों के दो पर्यायवाची लिखे।  
आग ,अमृत ,असुर ,घोड़ा ,चिड़िया ,अंकार ,आँख ,आकाश, आनंद,आंसू ।
4. निम्नलिखित शब्दों के विलोम शब्द लिखें।  
अंदर , ऊँचा ,अच्छा ,पूर्ण ,सफल , अपना , खुश , आगे , खुला  
उत्तर ।
5. दशहरा पर दस वाक्य लिखे व इस त्यौहार से संबंधित कुछ चित्र बनाए।
6. एक से पच्चीस तक हिंदी गिनती लिखे व याद करे।